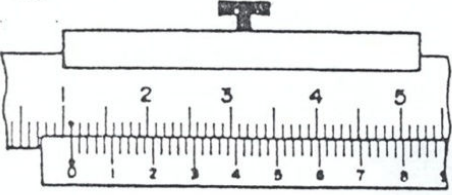
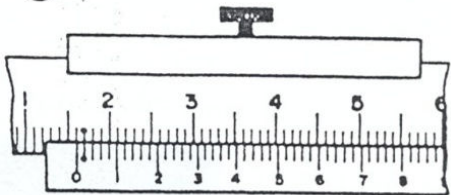
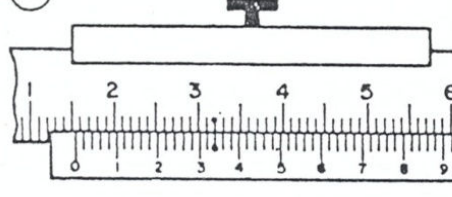
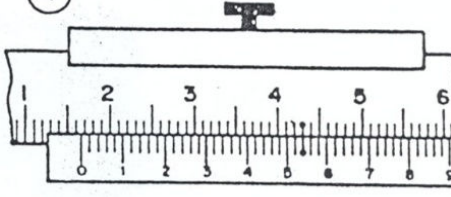
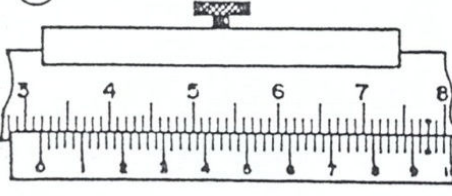
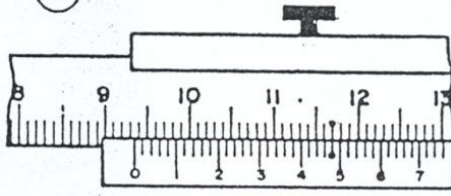
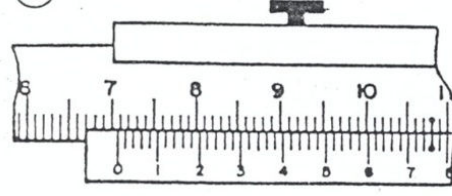
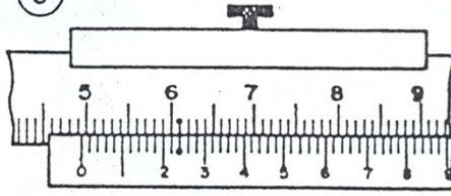
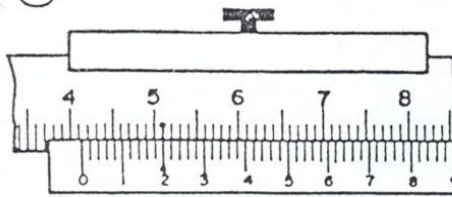
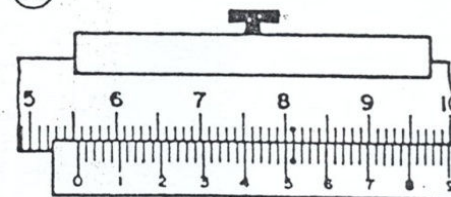
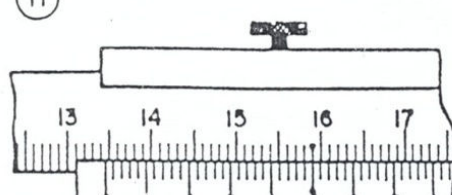
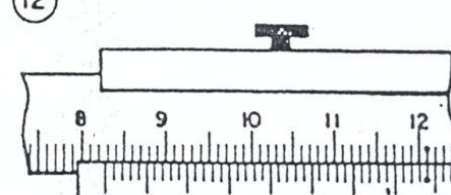


ESCOLA TÉCNICA ESTADUAL "LAURO GOMES"

Exercício de: Cont. Qualidade Professor: _____ Depto.: Mec.

ASSUNTO: paquímetro - aproximação 0,02 mm.

Aluno: _____ Série: _____ Nº: _____ Turma: _____


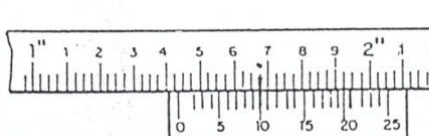
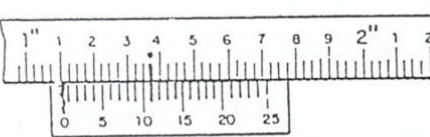
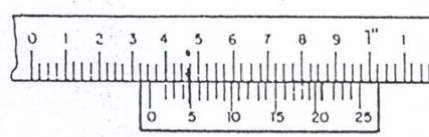
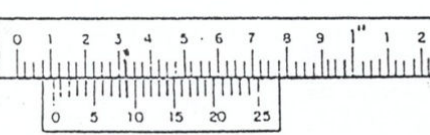
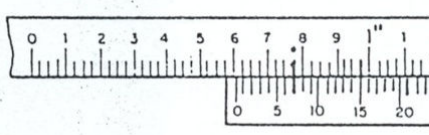
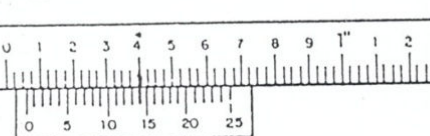


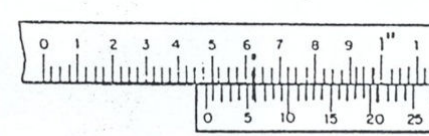
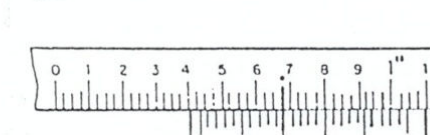
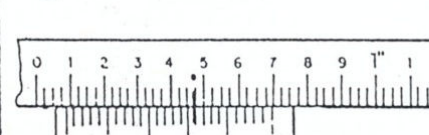
<p>①</p> 	<p>②</p> 	<p>1</p> <input type="text"/>
<p>③</p> 	<p>④</p> 	<p>2</p> <input type="text"/>
<p>⑤</p> 	<p>⑥</p> 	<p>3</p> <input type="text"/>
<p>⑦</p> 	<p>⑧</p> 	<p>4</p> <input type="text"/>
<p>⑨</p> 	<p>⑩</p> 	<p>5</p> <input type="text"/>
<p>⑪</p> 	<p>⑫</p> 	<p>6</p> <input type="text"/>
		<p>7</p> <input type="text"/>
		<p>8</p> <input type="text"/>
		<p>9</p> <input type="text"/>
		<p>10</p> <input type="text"/>
		<p>11</p> <input type="text"/>
		<p>12</p> <input type="text"/>

ESCOLA TÉCNICA ESTADUAL "LAURO GOMES"

Exercício de: Cont. Qualidade Professor: _____ Depto.: Mec.

ASSUNTO: paquímetro - aproximação 0,001"

Aluno: _____ Série: _____ Nº: _____ Turma: _____

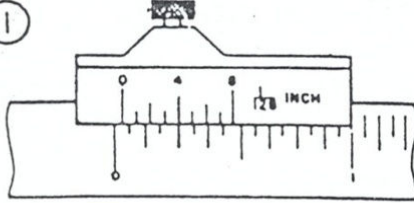
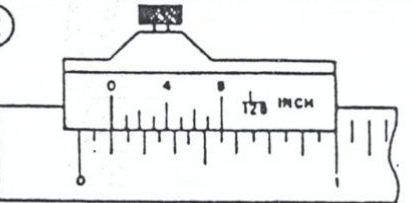
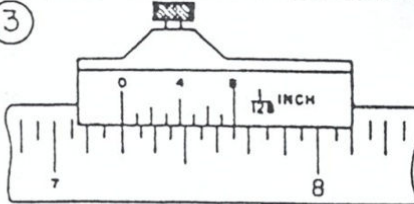
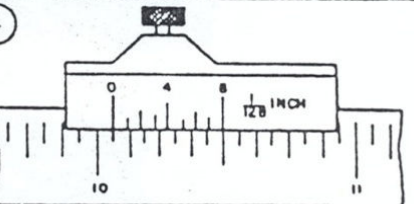
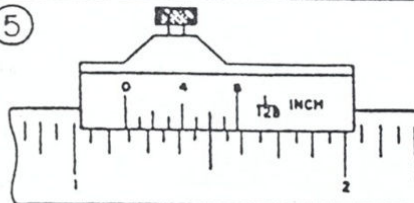
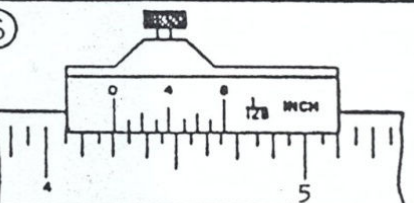
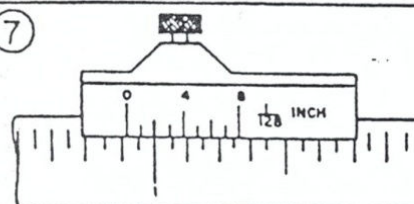
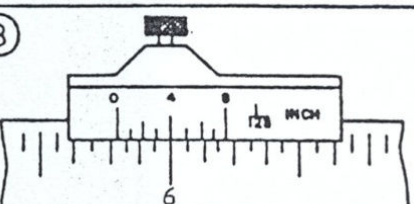
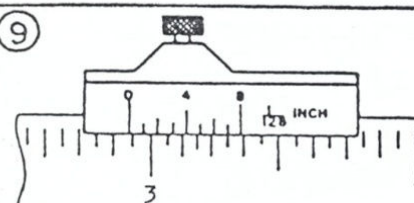
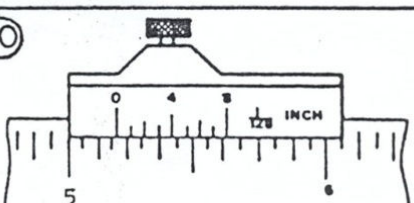
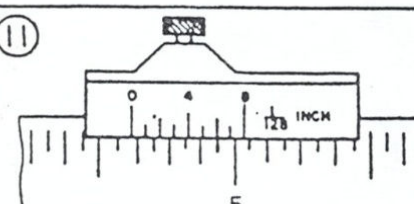
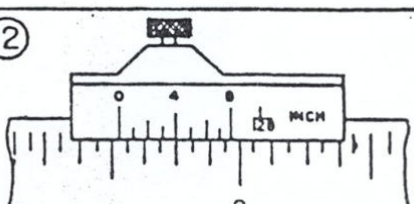
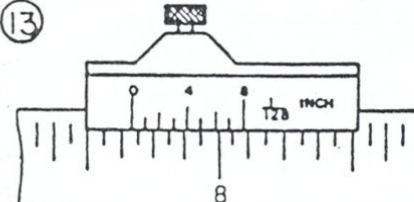
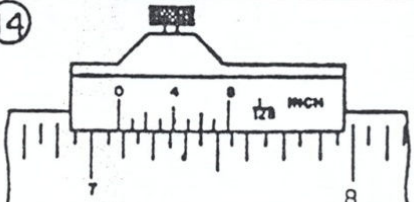
<p>①</p> 	<p>②</p> 	<p>1</p> <input type="text"/>
<p>③</p> 	<p>④</p> 	<p>2</p> <input type="text"/>
<p>⑤</p> 	<p>⑥</p> 	<p>3</p> <input type="text"/>
<p>⑦</p> 	<p>⑧</p> 	<p>4</p> <input type="text"/>
<p>⑨</p> 	<p>⑩</p> 	<p>5</p> <input type="text"/>
<p>⑪</p> 	<p>⑫</p> 	<p>6</p> <input type="text"/>
		<p>7</p> <input type="text"/>
		<p>8</p> <input type="text"/>
		<p>9</p> <input type="text"/>
		<p>10</p> <input type="text"/>
		<p>11</p> <input type="text"/>
		<p>12</p> <input type="text"/>

ESCOLA TÉCNICA ESTADUAL "LAURO GOMES"

Exercício de: Cont. Qualidade Professor: _____ Depto.: Mec.

ASSUNTO: Paquímetro - polegada fracionária - 1/128

Aluno: _____ Série: _____ Nº: _____ Turma: _____

<p>①</p> 	<p>②</p> 	<p>RESPOSTAS</p> <table border="1"> <tr><td></td><td>1</td></tr> <tr><td></td><td>2</td></tr> </table>		1		2
	1					
	2					
<p>③</p> 	<p>④</p> 	<table border="1"> <tr><td></td><td>3</td></tr> <tr><td></td><td>4</td></tr> </table>		3		4
	3					
	4					
<p>⑤</p> 	<p>⑥</p> 	<table border="1"> <tr><td></td><td>5</td></tr> <tr><td></td><td>6</td></tr> </table>		5		6
	5					
	6					
<p>⑦</p> 	<p>⑧</p> 	<table border="1"> <tr><td></td><td>7</td></tr> <tr><td></td><td>8</td></tr> </table>		7		8
	7					
	8					
<p>⑨</p> 	<p>⑩</p> 	<table border="1"> <tr><td></td><td>9</td></tr> <tr><td></td><td>10</td></tr> </table>		9		10
	9					
	10					
<p>⑪</p> 	<p>⑫</p> 	<table border="1"> <tr><td></td><td>11</td></tr> <tr><td></td><td>12</td></tr> </table>		11		12
	11					
	12					
<p>⑬</p> 	<p>⑭</p> 	<table border="1"> <tr><td></td><td>13</td></tr> <tr><td></td><td>14</td></tr> </table>		13		14
	13					
	14					